



$$8 - \square = \square$$



$$\square - \square = \square$$



$$10 - 6 = \square$$



$$9 - 5 = \square$$

4 P

2 $5 - 3 = \square$

$9 - 6 = \square$

$7 - 5 = \square$

$5 - 4 = \square$

$8 - 4 = \square$

$3 - 2 = \square$

$9 - 8 = \square$

$10 - 6 = \square$


4 P



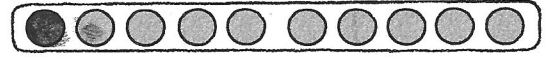
$$3 + \square = 10$$



$$8 + \square = 10$$



$$6 + \square = 10$$



$$1 + \square = 10$$

4 P

4 $\boxed{2} \quad \boxed{7} \quad \boxed{9}$

$\square + \square = \square$

$\square + \square = \square$

$\square - \square = \square$

$\square - \square = \square$

$\boxed{6} \quad \boxed{2} \quad \boxed{8}$

$\square + \square = \square$

$\square + \square = \square$

$\square - \square = \square$

$\square - \square = \square$

$\boxed{2} \quad \square \quad \boxed{7}$

$\square + \square = \square$

$\square + \square = \square$

$\square - \square = \square$

$\square - \square = \square$

6 P

Du hast _____ Punkte von 18 Punkten erreicht.